

NAME: _____

Profit Parade

Directions: Use subtraction to find the profit that each business makes for the items listed below to the nearest cent. The first one has been done for you.

1 A department store buys jeans for \$15 a pair and sells them for \$45 a pair.


 \$30 profit

2 An eyeglass store at the mall buys eyeglass frames for \$33 and sells them for \$300.

 profit

3 One text message costs the cell phone company about $\frac{1}{3}$ of a cent, but the cell phone company charges 20¢.

 profit



4 It costs the movie theater about 60¢ to make a medium bag of popcorn, but the theater sells it for \$6.

 profit

5 A soda at a fast-food restaurant costs about 20¢, but the restaurant sells it for \$1.59.


 profit

6 A grocery store buys a can of soup for \$1.17 and sells it for \$1.29.

 profit

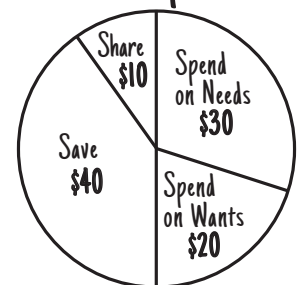
Budget Basics

Directions: Make a budget. Pretend you earned \$100. On the back of this page, draw a circle graph divided into four parts to show how much you would budget for each of the following:



1. SPENDING: Money for things I **need** \$ _____
2. SPENDING: Money for things I **want** \$ _____
3. SAVING: Money I want to **save** \$ _____
4. SHARING: Money I want to **give** to help others* \$ _____

Example:



*Remember to get your parent's permission before donating money.